

Litera Valley Zee School, Hosur
Grade 2 - Optional Worksheet Practice-September (2019-20) – Week 3

English

(Date of Submission:18-09-19)

Topic: Creative Writing

Write a short story about the adventures of a baby bee. You can use the words given in the box.

It is a bright and sunny day. A baby bee flies out for the first time.....

hive	flower	nectar	tree	breeze	hot
children	bird	play	grass	mother bee	father bee
garden					

Dictation Words for Home Test: (Prepare and complete the test in the assignment note.)

1. window
2. garden
3. small creatures
4. difficult
5. building
6. straws
7. grass
8. nesting place
9. sparrows
10. father

Tamil

(Date of Submission:19-09-19)

Topic: பாடலை நிறைவு செய்க

குக்குப் குக்குப் புகைவண்டி
புறப்படப் போகுது -----
ரோஜா வண்டியின் ஓட்டுனராம்

ஜானும், ஜேம்ஸும் -----
காஷ்மீர் ஸ்ரீநகர் சென்றிடலாம்
ஆப்பிள் ----- பார்த்திடலாம்
அதில் கொஞ்சம் பறித்து -----
புறப்பட போகுது ஏறிடுங்க!

Hindi

(Date of Submission:19-09-19)

Topic:

प्र.१. नीचे दिए गए शब्दों जैसे कुछ शब्द अपने मन से जोड़ो ।

बोलो, तितली, डाल,
_____, _____, _____,
_____, _____, _____ .

प्र.२. नीचे लिखी चीज़े किन-किन रंगों की हो सकती हैं ?

तितली : _____ बैंगन : _____ लड्डू : _____
सूरजमुखी : _____ प्याला : _____ साग : _____
संतरा : _____ मिट्टी : _____ कुर्ता : _____

EVS

(Date of Submission:20-09-19)

Topic: EXPLORING THE NEIGHBOURHOOD

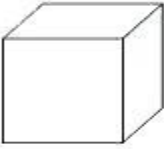
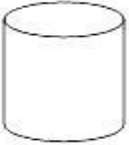



- 1.Stick your favourite neighbourhood place and write five sentences about it.
- 2.Write down three things you should do to be a good neighbour.
- 3.Make a pocket notebook with your information, Father mobile number, mother mobile number and Emergency contact number.

Topic: Shapes

3D Shape Properties

Name _____

Write a description for each shape. Think carefully about their properties.

	This 3D shape is a _____. It has _____.
	This 3D shape is a _____. It has _____.
	This 3D shape is a _____. It has _____.
	This 3D shape is a _____. It has _____.
	This 3D shape is a _____. It has _____.

Cube Cylinder Cuboid Cone Sphere

b) Write tables from 6 to 9 and practice the same.

Topic: Tux paint and Stykz

Answer the following

1. What are the 4 parts of Tux paint window?
2. What are called nodes and segments in Stykz?

3. What is the use of controller palette in Stykz?